

Count and colour the odd one out in each row. >

There were 10 balls in each sports bag.
Can you find out how many are missing?

Children's Menu

Deep fried Whole tail Scampi
with Chips & peas £5.25

Battered Fish with Chips
& Beans or Peas £4.95

Beef Burger in a Bun
with Chips £4.75

Gluten Free Breaded Chicken Strips
Served with Chips & Beans or peas £4.50

Sausages (meat or vegetable)
Served with Chips & Beans or peas £4.50

Home-made Beef Lasagne,
with Chips or Garlic Bread £4.50


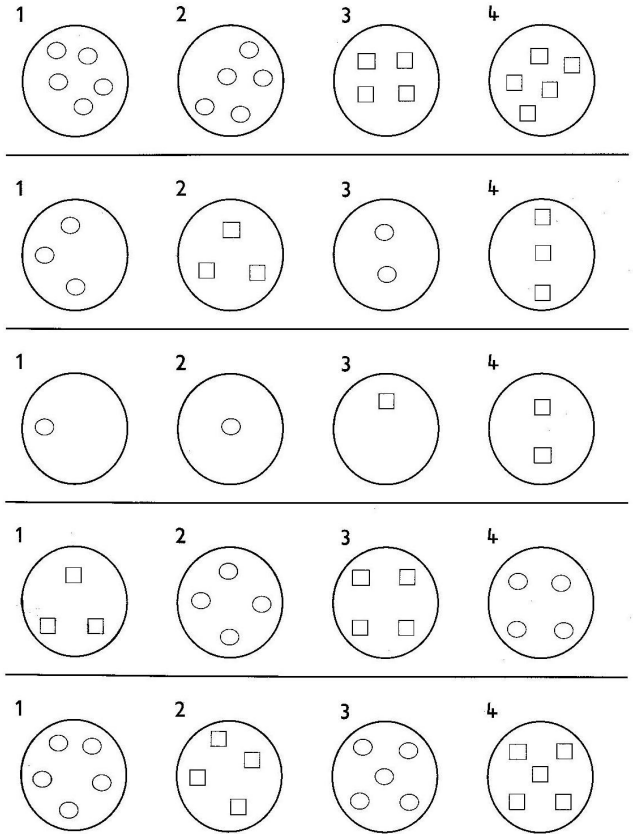


Pasta in Sauce Please ask for varieties
with Garlic Bread or Chips £4.50

Sliced Ham
Served with fried Egg & Chips £4.50

Homemade Desserts

Chocolate Brownie £2.50
Bread & Butter Pudding £2.50
Fruit Crumble £2.50
Sticky Toffee Pudding £2.50
1 scoop of Ice Cream £2.00

There are 10 differences between the 2 lorries. Find them
and circle them, then colour in the pictures.



Go through the maze and find out
how the girl is
going to go on holiday this
summer :

By air , road
Or Sea