

Count and colour the odd one out in each row. >

There were 10 balls in each sports bag.
Can you find out how many are missing?

Children's Menu

Deep fried Whole tail Scampi
with Chips & peas £5.95

Battered Fish with Chips
& Beans or Peas £5.95

Beef Burger in a Bun
with Chips £5.75

Breaded Chicken Strips
Served with Chips & Beans or peas £4.95

Sausages (meat or vegetable)
Served with Chips & Beans or peas £4.95

Home-made Beef Lasagne,
with Chips or Garlic Bread £4.95



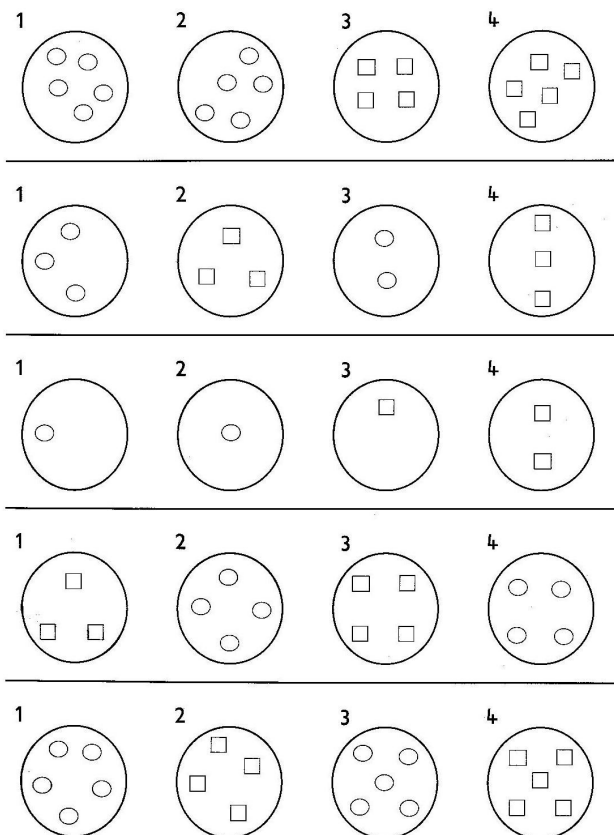
Tomato Pasta
with Garlic Bread or Chips £4.95

Sliced Ham
Served with fried Egg & Chips £4.95

Homemade Desserts


Chocolate Brownie £3.00
Bread & Butter Pudding £3.00
Fruit Crumble £3.00
Sticky Toffee Pudding £3.00
1 scoop of Ice Cream £2.00

There are 10 differences between the 2 lorries. Find them and circle them, then colour in the pictures.




Go through the maze and find out how the girl is going to go on holiday this summer :

By air ,road
Or Sea




Complete the picture and colour it in.



Hold it!

This puzzle is all about containers. See if you can find all the listed words in this mini word search.




BACKPACK
BAG
BOTTLE
BOWL
BOX
CUP
FLASK

JUG
KEG
POUCH
PURSE
RUCKSACK
VASE

B	K	K	P	C	R	G
A	C	S	U	T	U	M
G	A	A	R	J	C	P
X	P	L	S	Q	K	D
I	K	F	E	B	S	V
H	C	U	O	P	A	L
R	A	X	K	S	C	W
A	B	G	E	K	K	O
B	O	T	T	L	E	B

Shade it

Shade in every fragment of this picture that contains a dot to reveal a hidden picture.



Dots & Boxes, take it in turns to join 2 dots at a time and turn them into boxes. The player with the most boxes wins. If you are unsure how to play please ask a member of the team to help you.

Join each frog to the right pond

